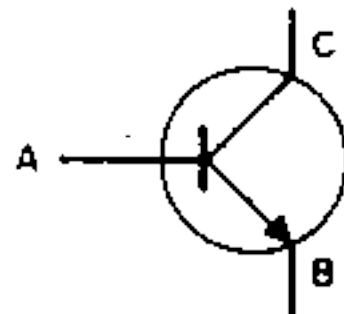


3.1.11.2

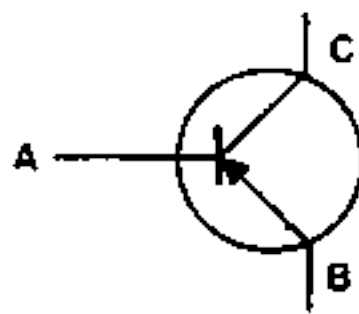


Identifique o terminal "emissor"

- a) A
- b) B
- c) C
- d) Não há emissor

Nota: Ver nota da pergunta nº. 3.1.11.1

3.1.11.3

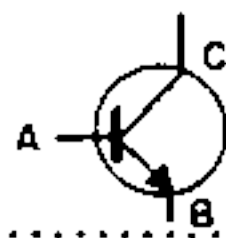


Identifique o terminal "base"

- a) A
- b) B
- c) C
- d) Não há base

Nota: Ver nota da pergunta nº. 3.1.11.1

3.1.11.4



Identifique o terminal "colector"

- a) A
- b) B
- c) C
- d) Não há colector

Nota: Ver nota da pergunta nº. 3.1.11.1